

Pallavan UPV Jhalawar
Summer Assignment 2016

Class - V
Subject- English

Date _____
Name _____

1. Write 20 news headlines from the English newspaper.
2. Write a story which you will read during summer holidays.
3. Describe your summer holidays in your own words.
4. Write 20 synonyms and 20 antonyms and make a table of it.
5. Search 50 new words from the dictionary and write in the summer assignment.
6. Who is your favourite Indian Cricketer? Write about him and in which team he is playing in IPL.
7. Write the formula of tenses three times each which have been taught in the class and learn them by heart.

Directions: Add the correct punctuation to the end of these sentences. Then on the line write whether the sentence is Declarative, Interrogative, or Exclamatory.

1. Do you like chewing gum _____
2. Drew dropped his book _____
3. My teacher likes to read _____
4. What is your address _____
5. Who is your teacher _____
6. What a beautiful day _____
7. I love this book _____
8. An island is surrounded by water _____
9. You won _____
10. Computers are a great way to learn _____

Directions: Write your own interrogative, declarative, and exclamatory sentence.

13. Interrogative Sentence-

14. Declarative Sentence-

15. Exclamatory Sentence-

Below is a list of words that when paired with the proper noun makes it a collective noun.

Match the word with proper noun by writing the letter.

a. cluster	f. flock	k. army
b. litter	g. bed	l. bunch
c. crowd	h. lock	m. tribe
d. flight	i. bundle	n. swarm
e. culture	j. herd	o. chain

- _____ of ants
- _____ of mountains
- _____ of hair
- _____ of bees
- _____ of onlookers
- _____ of Indians
- _____ of grapes
- _____ of newspapers
- _____ of puppies
- _____ of oysters
- _____ of stairs
- _____ of bananas
- _____ of bacteria
- _____ of birds
- _____ of elephants



Contractions: Class - 5

Name _____

Fill in the Blank :-

- _____ going outside. (He is)
- _____ finished eating. (They have)
- He _____ sing. (can not)
- _____ go swimming. (Let us)
- You _____ do that. (should not)
- They _____ coming. (are not)
- _____ leaving soon. (They are)
- _____ a sunny day. (It is)
- She _____ look too happy. (did not)
- _____ better go now. (I had)
- I _____ stay late. (will not)
- _____ have fun at the show. (We will)

Subject:- Hindi

प्रश्न – 1. फरीदा बुआ को क्या अच्छा लगता है ?

उत्तर— _____

प्रश्न – 2. गोपाल की माँ ने गोपाल से बंदर के बारे में क्या कहा ?

उत्तर— _____

प्रश्न – 3. गोपाल को कठघरे के पास देखकर चीते ने क्या किया ?

उत्तर— _____

प्रश्न – 4. वर्ण की परिभाषा देते हुए स्वर और व्यंजन में अंतर बताइए ।

उत्तर— _____

प्रश्न – 5. ह्रस्व और दीर्घ स्वर कौन-कौनसे हैं ? लिखिए ।

उत्तर— _____

प्रश्न – 6. निम्नलिखित शब्दों का वर्ण-विच्छेद कीजिए –

(क) क्षत्रिय – (ख) पुरुष –

(ग) उपदेश – (घ) पवन –

प्रश्न – 7. शब्द की परिभाषा देते हुए इसके भेद लिखिए ।

उत्तर – _____

Project - Work

प्रश्न -1. गर्मी की छुट्टियों में आप जिस स्थान पर घूमने गए आप ने वहाँ कौन-कौन से दर्शनीय स्थल देखे। उनका वर्णन अपने शब्दों में कीजिए।

Subject:- Math

Math is Fun:-

A. Activity based on Cheque:-

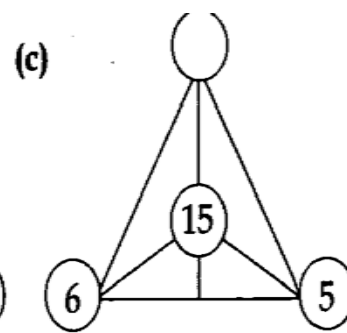
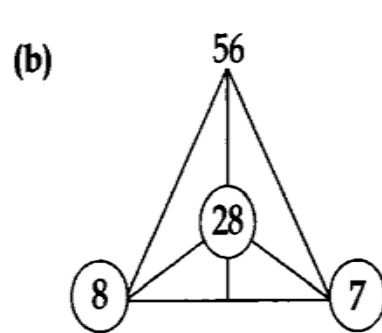
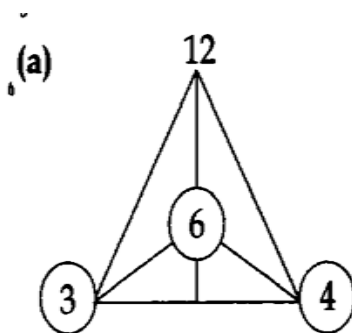
1. Observe a Cheque carefully. To Draw your own Cheque and fill a 7- digit number Indian Place Value System.
2. Convert the value in the International System of Numeration and make another Cheque.
3. Do not forget to sign your Cheques.

B. Word Search:-

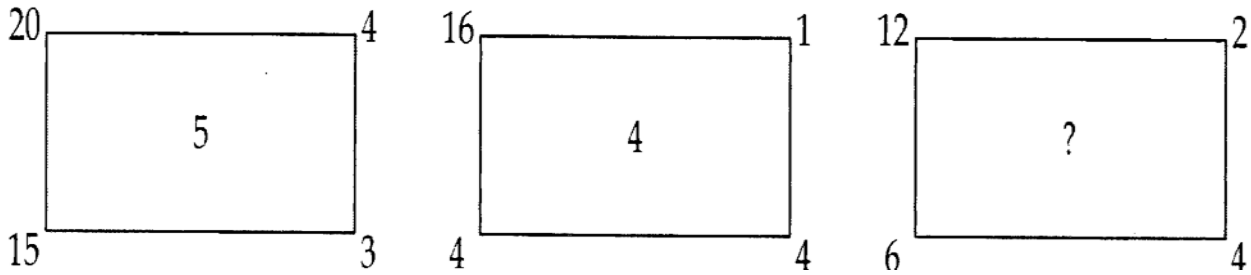
1. I am the number which comes before a given number.
2. I am the number which comes after a given number.
3. I am not even.
4. I am not odd.
5. Zero is included in me.
6. I can only take values from 0 to 9.
7. I am also called a counting number.
8. I am a number multiplied by itself.

N	A	T	U	R	A	L	B	Q	R	S
P	T	R	I	A	N	G	U	L	A	R
P	R	E	D	E	C	E	S	S	O	R
L	M	N	O	T	R	A	B	C	E	D
S	U	C	C	E	S	S	O	R	G	F
H	L	P	T	X	S	C	I	J	K	L
I	M	Q	U	Y	Q	D	D	M	N	O
E	V	E	N	Z	U	E	I	P	O	Q
J	N	R	V	A	A	F	G	R	D	S
K	O	S	W	B	R	G	I	T	D	U
W	H	O	L	E	E	H	T	V	X	Y

C. Which number goes on the top point of pyramid(c)?

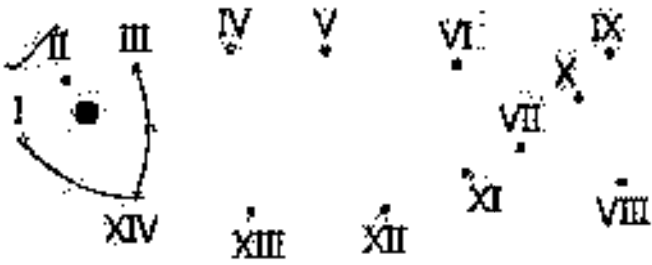


D. 1. Replace the question mark with appropriate number.



2. What number should logically replace the question mark (1, 3, 8, 19, 42, and 89)?

E. Join the dots to get an aquatic animal.

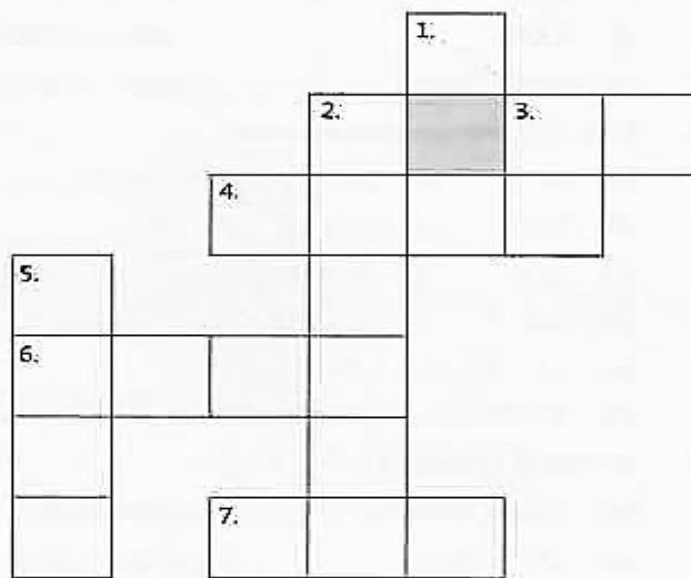


F. Solve the following crossword puzzle with the help of given clues.

[Hint: - Record all your answer in Roman Numerals.]

Across	
3.	$500 - 100 =$ _____
4.	$27 - 5 =$ _____
6.	$72 - 8 =$ _____
7.	$50 + 9 =$ _____

Down	
1.	$66 - 16 =$ _____
2.	$31 + 6 =$ _____
5.	$40 + 2 =$ _____



G. Make a note of 5-6 vehicle numbers of your friends and write it in a paper. The numbers should be of 3 or 4 digits. Now try to arrange the numbers in ascending or descending order. Also find the sum and difference

between the numbers by estimating each of the numbers to the nearest thousands. Compare the result with the actual sum or difference.

Ans: _____

Practice Based Question:-

Chapter1. Place Value

Q1. Write number names according to the Indian and International system of numeration:-

i) Indian System

a) 6, 23, 14,029 = _____

b) 98, 76,543 = _____

ii) International System

a) 62,314,029 = _____

b) 9,876,543 = _____

Q2. Write in expanded form also find successor and predecessor of following numbers:-

7, 23, 45,004 = _____

Successor _____ Predecessor _____

Q3. Write the greatest and smallest 8-digit number using the 0, 6,5,9,8,3,2,1. (Do not repeat any digit)

Greater to smaller digits _____ Smaller to greater digits _____

Greatest Number _____ Smallest Number _____

Q4. Round off the given numbers to the nearest 10, 100, 1000.

a) 814 = _____ (Nearest 10) b) 4,769 = _____ (Nearest 100) c) 41,238 = _____ (Nearest 1000)

Q5. Write in Roman numeral of following numbers:-

a) 249 = _____ b) 768 = _____ c) 1250 = _____

Q6. Write in Hindu Arabic numeral of following Roman numbers:-

a) CCCL=_____

b) MDCCLXXII=_____

c) DCCCLX = _____

Chapter2. The Four Operations

Q1. Write in columns and find the sum:-

a) $432626 + 292430 + 61508$

Q2. Write in columns and find the sum:-

a) $6567128 - 53761239$

Q3. Write in columns and find the Products:-

a) 7215×6000

Q4. Find the quotient and remainder:-

a) $321752 \div 78$

Q5. Simplify each expression using DMAS Rule:-

a) $16 + 12 \div 4 \times 5 - 2 =$ _____

b) $49 - 57 + 8 \div 4 \times 4 =$ _____

= _____ = _____

= _____ = _____

Subject:- Science

Q1. Tick the correct option-

i. Animals that can walk as well as fly.

- (a). Housefly (b). Mosquito (c).Cockroach (c). All of these

ii. Insecticides are chemical required to kill.

- (a). Rats (b).Insect (c). Birds (c). None of these

iii. Agents of seeds dispersal are.

- (a). Wind (b). Water (c). Animals (c). All of these

iv. Animals that have very sharp, pointed and curved front teeth.

- (a). Horses (b). Deer (c).Tiger (c). Cows

Q2. Write true and false-

i. Beetroot grows from stem. _____

ii. The tail of a fish helps it to move forward. _____

iii. A tiny baby plant lies between the seed leaves of a seed. _____

iv. all seeds are dispersed through water. _____

Q3. Answer the following question-

i. Name at least five Rabi crops.

Ans. _____

ii. Name two vegetables and two fruits that are available in summers.

Ans. _____

iii. Write the type of teeth found in Carnivores.

Ans. _____

iv. Give two examples of animals that breathe through gills.

Ans. _____

Q4. Match the following.

- | | |
|------------------------|-------------------------|
| i. Caribous deer | (a). Spiracles |
| ii. Insects | (b). Reptiles |
| iii. Snakes, Crocodile | (c) . Carrier of Oxygen |
| iv. Hemoglobin | (d) Frog |
| v. Webbed feed | (e). Arctic region |

Project work-

Make a chart on the different types of Habitats.

Subject:- SSt.

Q A. Fill in the blanks:-

1. _____ is our home.
2. A collection of maps bound together in a book is called an _____.
3. There are _____ main directions on a map.
4. On a map, desert is represented by the colour _____.
5. _____ is a model of the Earth.
6. Oceans are represented in Shades of _____.
7. The _____ maps depict land forms and water bodies.
8. The Earth is divided in to continents and _____.
9. The extreme north and the extreme South points of the Earth are called _____.
10. _____ was a Portuguese explorer who led an expedition to prove that the earth was round.

QB.Activity

Q1. Read the newspaper every day and note down the maximum and minimum temperature for one month in summer.

Q2. Find out some historical buildings, famous personalities and some special things of your city and write short note at least on two of them. Collect some pictures related to the topics.


Q3. Imagine that you are on an expedition to prove that the Earth is round. Write a short story about your voyage.

Q4. Mahatma Gandhi played a very important role in the “Freedom Movement” of India. Find out about his contribution and write a brief report. Collect some pictures and paste it.

Q5. Learn the work done in the notebook.

Subject: - Computer

Q1. Solve the given crossword.



Across

1. This reader can automatically input data from black and white stripes on the side of food packages
4. An input device useful for playing games
5. Abbreviation for the device that can input data from multiple choice tests
8. This input device is used for cashpoints, you can choose the options by selecting with your finger.
9. A pointing and clicking device
10. Used to type data into the computer

Down

2. This type of keyboard is useful in fast food restaurants, it often contains images.
3. Useful input device for transferring an exact copy from paper to the computer
6. Abbreviation for the device that can read characters from cheques
7. Input device used to capture sound and voices

Q2. Write about the famous five Indian personalities in the field of computer. To make your work more colourful add few pictures also.